

Homework Plus - 1

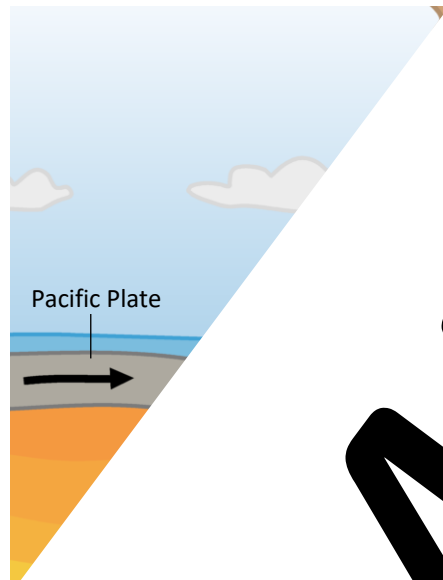
Preparing for Exam Success

Seek and Destroy

Below is a student answer to a GCSE Geography exam question. Your job is to seek and destroy errors the student made.

1. Read the exam question
2. Read the exam mark scheme
3. Seek and destroy errors
4. Identify improvements that could be made to the answer
5. Have a go at answering the question yourself

Study figure 1, a diagram showing the plate margin



Using Figure 1

Explain how earthquakes occur in Japan.

(6 marks)

Student Answer

Japan is a country that is located in the Pacific Ring of Fire.

The lighter oceanic plate sinks into the mantle, which pulls the rest of the plate with it. The heavier continental plate sinks below the lighter, less dense oceanic plate in the subduction zone. Hot lava rises up through the lithosphere, and some can eventually erupt as volcanoes.

Mark Scheme:

Level	Marks	Description
3 (Detailed)	5-6	AO2 Shows thorough geographical knowledge of the processes causing both volcanic and seismic activity at plate margin AO3 Demonstrates a clear understanding of the processes in a coherent and logical manner and how they occur in Japan
2 (Clear)	3-4	AO2 Shows a clear understanding of the processes causing volcanic and seismic activity AO3 Demonstrates a clear understanding of the processes and how they occur in Japan
1 (Basic)	1-2	AO2 Shows a basic understanding of the processes causing volcanic and seismic activity AO3 Demonstrates a basic understanding of the processes and how they occur in Japan
	0	

1. Correct any facts
2. What could it be?

answer.
further?

3. Attempt to answer yourself:

Silky Skills

This week we are focusing on OS map skills. In particular grid references. If you need to recap how to do 4 answers here: <https://www.internetgeography.net/geography>

To get you warmed up we've got some multiple choice questions. Map extract we've provided you with.

1. In which grid square will you find the church?

- a. 3425 ☐ b. 3426 ☐

2. In which grid square will you find the school?

- a. 3526 ☐

3. Which grid square contains the church?

- a. 3427 ☐

4. What is the name of the village?

- a. 3327 ☐

5. What is the name of the river?

- a. 15m ☐

6. Which grid square describes the features of grid square 3426?

- a. a valley with some leisure activities.
b. a narrow beach
c. a library and a hospital

8. What is the name of the village?

- a. 34825 ☐

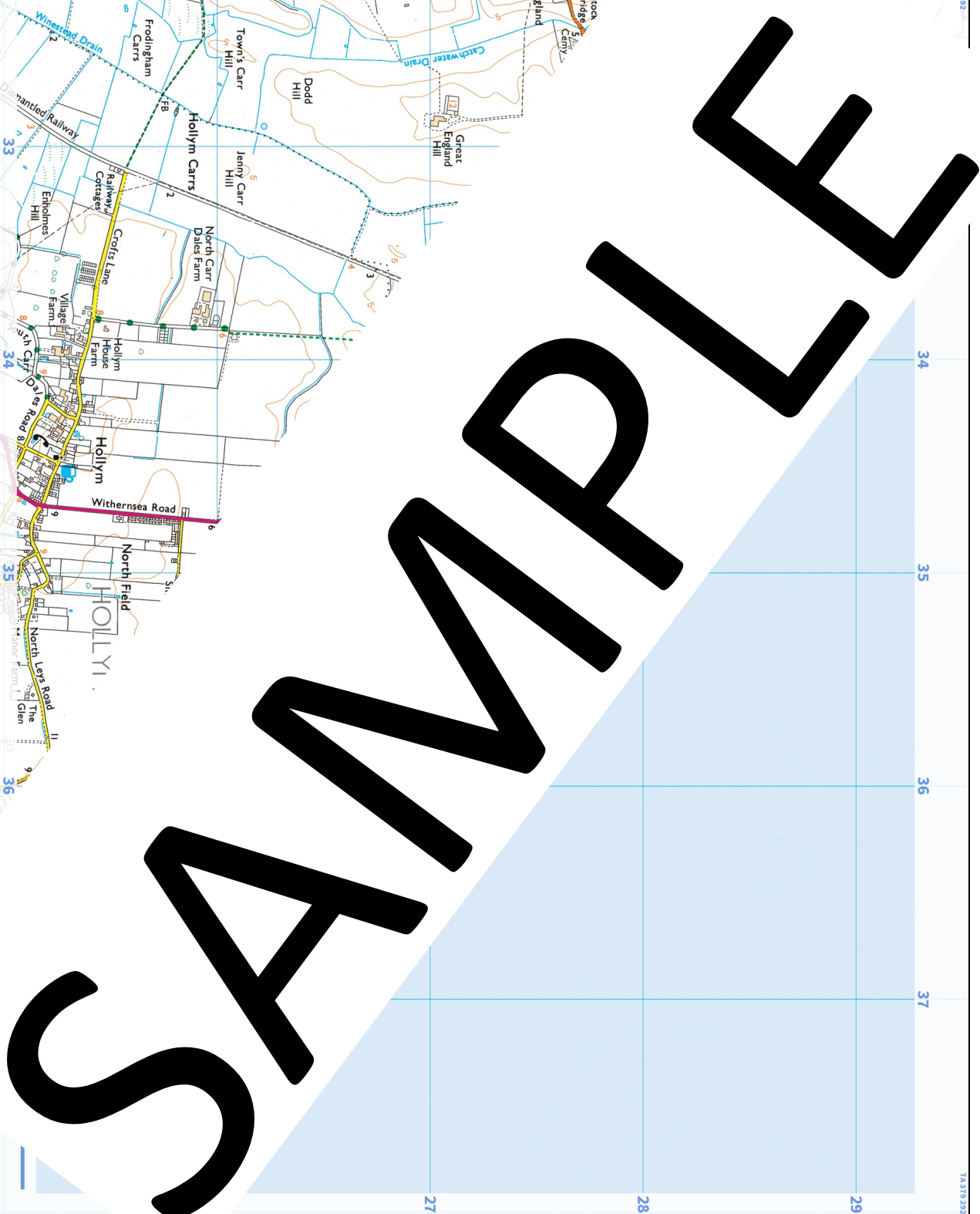
9. Give the 6 figure grid reference for the sewage works south east of Withernsea?

- b. 358265 ☐

- c. 358255 ☐

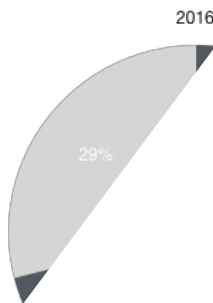
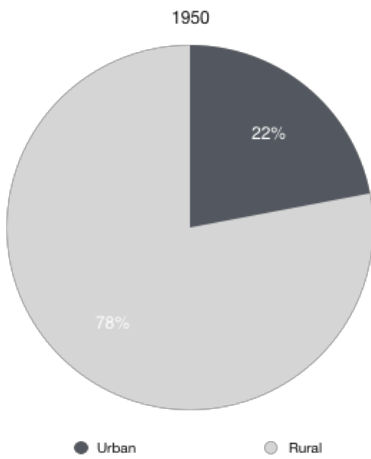
9. Give the 6 figure grid reference for the museum in Withernsea.

10. Give the 6 figure grid reference for the public telephone on Hull Road (B1362)



Dazzling Data

Study the pie charts showing the rural / urban population between 1950 and 2050 (estimated).



1. Complete the pie chart

Use the following

2. How many

3

of people living in urban areas in Algeria in

(2 marks)